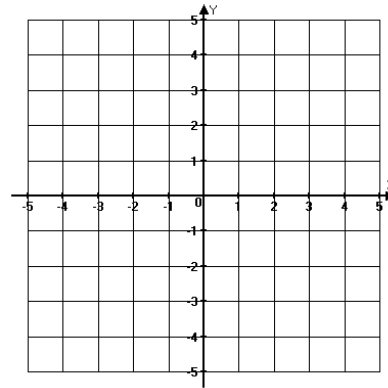


Representa las siguientes funciones lineales:

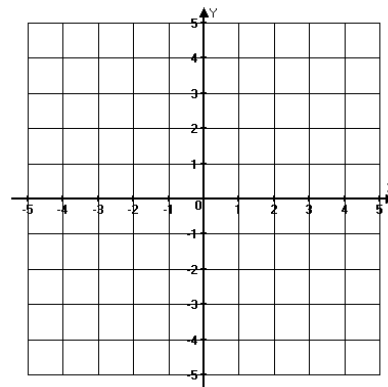
i.

x	f(x)
-2	7
-1	-5
0	-3
1	-1
2	1



ii.

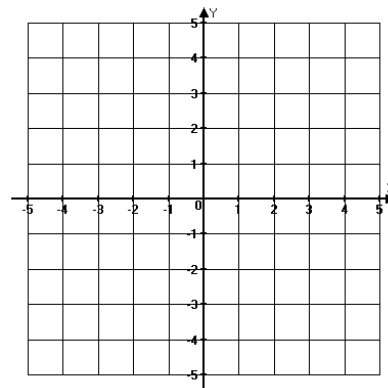
x	f(x)
-1/2	2
0	1
1/2	0
1	-1
3/2	-2



iii.

$$f(x) = -x + 2$$

x	f(x)



iv.

$$f(x) = \frac{1}{2}x - 1$$

x	f(x)

